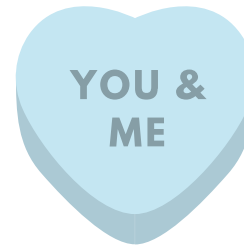
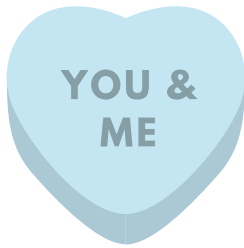
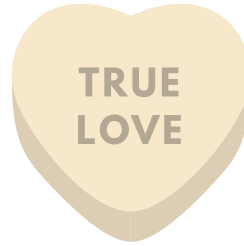
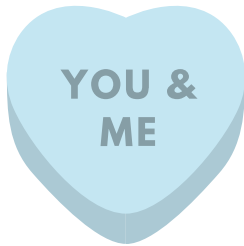


NAME _____

DATE _____

Your friend gives you a bag of candy hearts for Valentine's Day. Inside your bag, you find:



What fraction of "Love You" candies do you have?

Do you have a larger fraction of "You & Me" candies or "True Love" candies?

Which two candies have the same fraction?

You eat two candies. What fraction of candies did you eat from all the candies?
